

Name: _____

First Grade Self-Assessment

How am I doing?

My eyes and ears are always on the person talking.	I stay focused on my work.	I share my ideas during lessons.
I control my body and voice.	I'm a problem-solver when things don't go my way.	When my work feels hard, I keep going.

Red: THIS IS HARD FOR ME, I'M WORKING ON IT.

Yellow: I CAN DO THIS WITH REMINDERS.

Green: YES I DO IT! ON MY OWN!

Something I am proud of is....





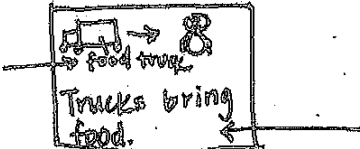
An example of this is...

Something that I will work to get better at is...

I'll do this by...

Name _____ Date _____

How does my piece go?

	Did I do it like a first grader?	Not Yet	Yes!
Overall	 <p>I wrote my opinion or my likes and dislikes and said why.</p>		
Lead	 <p>In the beginning, I got my reader's attention. I told the topic (or text) I am writing about and gave my opinion.</p>		
Ending	 <p>I wrote an ending for my piece.</p>		
Elaboration	 <p>I wrote at least one reason for my opinion.</p>		
Craft	 <p>I used labels and words to give details.</p>		

One thing I am really proud of in my writing is...

Look for the STAR in my writing to see it!

I'm going to work on...

I'll do this by...

Name: _____

First Grade Reading Reflection

Something that I'm proud of in reading is...

Something that I'm working on in reading is...

I will do my best reading at home...

When?
Where?
With Who?

Math Stories

Introduction to Place Value through addition and subtraction within 20 (Module 2)

In this unit we...

—solve addition and subtraction problems within 20 by

- putting together
- taking apart
- using 10
- drawing pictures
- counting on
- writing number sentences

standard 1.OA.1

Solve these problems. Show your thinking.



Read: Gerri has 9 basketballs. Laurel has 6 soccer balls.
How many balls do they have in all?

Think and Draw

Write:


My best strategy:

- ☐ Count all
- ☐ Count on
- ☐ Make a 10



Read: 18 ducks at the park. 10 are in the pond and 8 are on the grass. 9 fly away. How many ducks still in the park?

Think and Draw



Write:




My best strategy:

- ☐ Count on
- ☐ Take from 10
- ☐ Cross off

Name: _____

Read: Rachel has 17 oranges. She shares 9 with Erica. How many orange does Rachel have now?


Think and Draw




Write:

My best strategy:

- ☐ Count on
- ☐ Take from 10
- ☐ Cross off

Name: _____

Name: _____

First Grade Math Reflection

Something that I like doing in math is...

Something that is hard for me in math is...

Circle which one is true for you!

I know all
of my math
facts that
make 10 in a
snap.

I know some
of my math
facts that
make 10 in a
snap.

I need to work
on my math
facts that
make 10.

's

Math Stories

Introduction to Place Value through addition and subtraction within 20 (Module 2)

In this unit we...

- solve addition and subtraction problems within 20 by
 - putting together
 - taking apart
 - using 10
 - drawing pictures
 - counting on
 - writing number sentences


standard 1.OA.1

Solve these problems. Show your thinking.



Read: Gerri has 9 basketballs. Laurel has 6 soccer balls.
How many balls do they have in all?

Think and Draw



Write:



My best strategy:

- ☐ Count all
- ☐ Count on
- ☐ Make a 10



Read: 18 ducks at the park. 10 are in the pond and 8 are on the grass. 9 fly away. How many ducks still in the park?



Think and Draw

Write:



My best strategy:

☐

Count on

☐

Take from 10


☐

Cross off

Name: _____

Read: Rachel has 17 oranges. She shares 9 with Erica. How many orange does Rachel have now?

Think and Draw 



Write: 

My best strategy:

- ☐ Count on
- ☐ Take from 10
- ☐ Cross off

Name: _____